

This page intentionally left blank. You may use it for scratchwork.

1. [12 points] For each choice of a matrix A and vector \vec{b} below, determine whether or not the linear system $A\vec{x} = \vec{b}$ is consistent. If it is consistent, find a solution. If it is inconsistent, find a "least-squares solution" (a vector \vec{x} such that $\|A\vec{x} - \vec{b}\|$ is as small as possible).

(a) $A = \begin{pmatrix} 1 & 0 & 0 \\ 1 & 2 & 4 \\ 1 & 3 & 9 \end{pmatrix}$ and $\vec{b} = \begin{pmatrix} 1 \\ 5 \\ 7 \end{pmatrix}$.

$$\left(\begin{array}{ccc|c} 1 & 0 & 0 & 1 \\ 1 & 2 & 4 & 5 \\ 1 & 3 & 9 & 7 \end{array} \right) \rightsquigarrow \left(\begin{array}{ccc|c} 1 & 0 & 0 & 1 \\ 0 & 2 & 4 & 4 \\ 0 & 3 & 9 & 6 \end{array} \right) \rightsquigarrow \left(\begin{array}{ccc|c} 1 & 0 & 0 & 1 \\ 0 & 1 & 2 & 2 \\ 0 & 0 & 3 & 0 \end{array} \right)$$

$$\rightsquigarrow \left(\begin{array}{ccc|c} 1 & 0 & 0 & 1 \\ 0 & 1 & 0 & 2 \\ 0 & 0 & 1 & 0 \end{array} \right)$$

consistent; $\vec{x} = \begin{pmatrix} 1 \\ 2 \\ 0 \end{pmatrix}$

(b) $A = \begin{pmatrix} 1 & 1 \\ 0 & 1 \\ -1 & -2 \end{pmatrix}$ and $\vec{b} = \begin{pmatrix} 4 \\ -1 \\ -3 \end{pmatrix}$.

$$\left(\begin{array}{cc|c} 1 & 1 & 4 \\ 0 & 1 & -1 \\ -1 & -2 & -3 \end{array} \right) \rightsquigarrow \left(\begin{array}{cc|c} 1 & 0 & 5 \\ 0 & 1 & -1 \\ 0 & -1 & 1 \end{array} \right) \rightsquigarrow \left(\begin{array}{cc|c} 1 & 0 & 5 \\ 0 & 1 & -1 \\ 0 & 0 & 0 \end{array} \right)$$

consistent; $\vec{x} = \begin{pmatrix} 5 \\ -1 \\ 0 \end{pmatrix}$

(Part (c) on the reverse side)

(c) $A = \begin{pmatrix} 1 & 1 \\ 0 & 1 \\ -1 & -2 \end{pmatrix}$ and $\vec{b} = \begin{pmatrix} 3 \\ 0 \\ 0 \end{pmatrix}$.

$$\left(\begin{array}{cc|c} 1 & 1 & 3 \\ 0 & 1 & 0 \\ -1 & -2 & 0 \end{array} \right) \rightsquigarrow \left(\begin{array}{cc|c} 1 & 0 & 3 \\ 0 & 1 & 0 \\ \hline 0 & 0 & 3 \end{array} \right) \quad \boxed{\text{inconsistent}}$$

so we solve the "normal equation":

$$A^T A \vec{x} = A^T \vec{b}$$

$$\begin{pmatrix} 1 & 0 & -1 \\ 1 & 1 & -2 \end{pmatrix} \begin{pmatrix} 1 & 1 \\ 0 & 1 \\ -1 & -2 \end{pmatrix} \vec{x} = \begin{pmatrix} 1 & 0 & -1 \\ 1 & 1 & -2 \end{pmatrix} \begin{pmatrix} 3 \\ 0 \\ 0 \end{pmatrix}$$

$$\begin{pmatrix} 2 & 3 \\ 3 & 6 \end{pmatrix} \vec{x} = \begin{pmatrix} 3 \\ 3 \end{pmatrix}$$

$$\left(\begin{array}{cc|c} 2 & 3 & 3 \\ 3 & 6 & 3 \end{array} \right) \rightsquigarrow \left(\begin{array}{cc|c} 3 & 6 & 3 \\ 2 & 3 & 3 \end{array} \right) \rightsquigarrow \left(\begin{array}{cc|c} 1 & 2 & 1 \\ 2 & 3 & 3 \end{array} \right)$$

$$\rightsquigarrow \left(\begin{array}{cc|c} 1 & 2 & 1 \\ 0 & -1 & 1 \end{array} \right) \rightsquigarrow \left(\begin{array}{cc|c} 1 & 0 & 3 \\ 0 & 1 & -1 \end{array} \right)$$

so $\boxed{\vec{x} = \begin{pmatrix} 3 \\ -1 \end{pmatrix}}$ is the least-squares solution.

2. [9 points] Suppose that A is an $n \times n$ matrix and \vec{u}, \vec{v} are vectors in \mathbb{R}^n . Show that if $A\vec{u} = A\vec{v}$ and $\vec{u} \neq \vec{v}$, then A is not invertible.

Sol'n 1 (by contradiction)

Suppose that $\vec{u} \neq \vec{v}$ and $A\vec{u} = A\vec{v}$.

\leadsto Suppose, for contradiction, that A is invertible.

Then

$$A\vec{u} = A\vec{v}$$

$$\Rightarrow A^{-1}A\vec{u} = A^{-1}A\vec{v}$$

$$\Rightarrow \vec{u} = \vec{v} \quad \Leftarrow \quad (\text{contradiction since } \vec{u} \neq \vec{v}).$$

So A is not invertible after all.

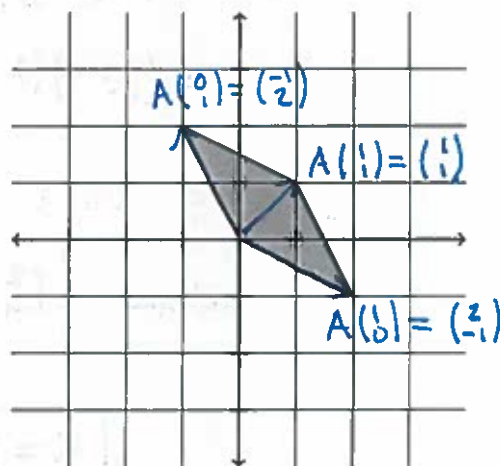
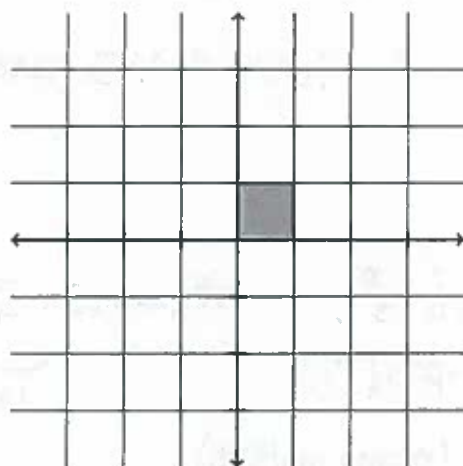
Sol'n 2

If $A\vec{u} = A\vec{v}$ & $\vec{u} \neq \vec{v}$, then $A(\vec{u} - \vec{v}) = \vec{0}$.

Since $\vec{u} - \vec{v} \neq \vec{0}$, this means that $\vec{u} - \vec{v}$ is a nonzero element of the nullspace of A . But invertible matrices must have trivial nullspace, so A cannot be invertible.

This page intentionally left blank. You may use it for scratchwork.

3. [9 points] Suppose that A is a 2×2 matrix, and that A represents (in the standard basis) a graphics operation that transforms the unit square as shown. The figure on the left shows the original unit square, while the figure on the right shows its image after transformation.



- (a) Determine the matrix A .

$$A\begin{pmatrix} 1 \\ 0 \end{pmatrix} = \begin{pmatrix} 2 \\ -1 \end{pmatrix}$$

$$\& A\begin{pmatrix} 0 \\ 1 \end{pmatrix} = \begin{pmatrix} -1 \\ 2 \end{pmatrix}$$

so $A = \begin{pmatrix} 2 & -1 \\ -1 & 2 \end{pmatrix}$

note: $A = \begin{pmatrix} -1 & 2 \\ 2 & -1 \end{pmatrix}$ is also a valid answer (the answers to (c) & (d) are different for this choice).

- (b) Find a nonzero vector \vec{v} such that $A\vec{v} = \vec{v}$.

$$A\vec{v} = \vec{v} \quad (\Leftrightarrow) \quad (A - I)\vec{v} = 0$$

$$\& \text{nullspace of } \begin{pmatrix} 2 & -1 \\ -1 & 2 \end{pmatrix} - \begin{pmatrix} 1 & 0 \\ 0 & 1 \end{pmatrix} = \begin{pmatrix} 1 & -1 \\ -1 & 1 \end{pmatrix}$$

is $\text{span}\left(\begin{pmatrix} 1 \\ 1 \end{pmatrix}\right)$ (row-reduces to $\begin{pmatrix} 1 & -1 \\ 0 & 0 \end{pmatrix}$)

$$\vec{v} = \begin{pmatrix} 1 \\ 1 \end{pmatrix} \quad (\text{or any multiple.})$$

(Parts (c) and (d) on the reverse side)

- (c) Find a nonzero vector \vec{w} such that $A\vec{w}$ is a scalar multiple of \vec{w} , but is not equal to \vec{w} .

$$\begin{aligned} |A - \lambda I| &= \begin{vmatrix} 2-\lambda & -1 \\ -1 & 2-\lambda \end{vmatrix} = (2-\lambda)^2 - (-1)^2 = \lambda^2 - 4\lambda + 3 \\ &= (\lambda-1)(\lambda-3). \quad \text{So } \lambda=1 \text{ \& } \lambda=3 \text{ are the eigenvalues.} \end{aligned}$$

eigenvector for $\lambda=3$:

$$\begin{aligned} \text{nullspace} \left(\begin{pmatrix} 2 & -1 \\ -1 & 2 \end{pmatrix} - \begin{pmatrix} 3 & 0 \\ 0 & 3 \end{pmatrix} \right) &= \text{nullspace} \begin{pmatrix} -1 & -1 \\ -1 & -1 \end{pmatrix} = \text{nullspace} \begin{pmatrix} 1 & 1 \\ 0 & 0 \end{pmatrix} \\ &= \text{span} \begin{pmatrix} -1 \\ 1 \end{pmatrix}. \quad \text{(row-reducing).} \end{aligned}$$

$$\boxed{\vec{w} = \begin{pmatrix} -1 \\ 1 \end{pmatrix}} \quad (\text{or any multiple})$$

- (d) Let $B = \{\vec{v}, \vec{w}\}$, where \vec{v}, \vec{w} are the vectors found in parts (b) and (c). What is the matrix representation of this graphics operation in the basis B ?

$$\begin{aligned} A\vec{v} &= \vec{v} \\ &= 1 \cdot \vec{v} + 0 \cdot \vec{w} \end{aligned} \quad \text{so} \quad [A\vec{v}]_B = \begin{pmatrix} 1 \\ 0 \end{pmatrix}.$$

$$\begin{aligned} A\vec{w} &= 3\vec{w} \\ &= 0 \cdot \vec{v} + 3 \cdot \vec{w} \end{aligned} \quad \text{so} \quad [A\vec{w}]_B = \begin{pmatrix} 0 \\ 3 \end{pmatrix}.$$

$$\begin{aligned} [A]_B &= \begin{pmatrix} [A\vec{v}]_B & [A\vec{w}]_B \\ | & | \\ | & | \end{pmatrix} \\ &= \boxed{\begin{pmatrix} 1 & 0 \\ 0 & 3 \end{pmatrix}} \end{aligned}$$

4. [9 points] Let $\vec{u} = \begin{pmatrix} -1 \\ 2 \\ -8 \end{pmatrix}$ and $\vec{v} = \begin{pmatrix} 1 \\ -1 \\ 4 \end{pmatrix}$. Find a basis of \mathbb{R}^3 that contains both \vec{u} and \vec{v} .

we can now reduce $\left(\begin{array}{c|ccc|c} \vec{u} & \vec{v} & \vec{e}_1 & \vec{e}_2 & \vec{e}_3 \end{array} \right)$ and take
the vectors corresponding to pivot columns.

$$\begin{pmatrix} -1 & 1 & 1 & 0 & 0 \\ 2 & -1 & 0 & 1 & 0 \\ -8 & 4 & 0 & 0 & 1 \end{pmatrix} \rightarrow \begin{pmatrix} 1 & -1 & -1 & 0 & 0 \\ 0 & 1 & 2 & 1 & 0 \\ 0 & -4 & -8 & 0 & 1 \end{pmatrix}$$

$$\rightarrow \begin{pmatrix} 1 & 0 & 1 & 1 & 0 \\ 0 & 1 & 2 & 1 & 0 \\ 0 & 0 & 0 & 4 & 1 \end{pmatrix}$$

$$\rightarrow \begin{pmatrix} \textcircled{1} & 0 & 1 & 0 & -1/4 \\ 0 & \textcircled{1} & 2 & 0 & -1/4 \\ 0 & 0 & 0 & \textcircled{1} & 1/4 \end{pmatrix} \quad (\text{RREF})$$

so use columns 1, 2, & 4:

$$\left\{ \begin{pmatrix} -1 \\ 2 \\ -8 \end{pmatrix}, \begin{pmatrix} 1 \\ -1 \\ 4 \end{pmatrix}, \begin{pmatrix} 0 \\ 1 \\ 0 \end{pmatrix} \right\}$$

(many other answers
are possible).

This page intentionally left blank. You may use it for scratchwork.

5. [9 points] Denote by \mathcal{P}_3 the vector space of polynomials in one variable of degree at most 3. Define a transformation $T: \mathcal{P}_3 \rightarrow \mathcal{P}_3$ by $T(p(x)) = \frac{d}{dx}p(x)$ for all $p(x) \in \mathcal{P}_3$. For example,

$$T(x^3 + 4x^2) = 3x^2 + 8x.$$

- (a) Show that T is a linear transformation.

For any two $p(x), q(x) \in \mathcal{P}_3$ and $c \in \mathbb{R}$,

$$\begin{aligned} T(p(x) + c \cdot q(x)) &= \frac{d}{dx}(p(x) + c \cdot q(x)) \\ &= p'(x) + c \cdot q'(x) \\ &= T(p) + c \cdot T(q) \quad \checkmark \end{aligned}$$

so T is linear.

- (b) Denote by $S = \{1, x, x^2, x^3\}$ the standard basis of \mathcal{P}_3 . Find $[T]_S$, the matrix representation of T in the standard basis.

the columns of $[T]_S$ are found as follows:

$$[T(1)]_S = [0]_S = \begin{pmatrix} 0 \\ 0 \\ 0 \\ 0 \end{pmatrix}$$

$$[T(x)]_S = [1]_S = \begin{pmatrix} 1 \\ 0 \\ 0 \\ 0 \end{pmatrix}$$

$$[T(x^2)]_S = [2x]_S = \begin{pmatrix} 0 \\ 2 \\ 0 \\ 0 \end{pmatrix}$$

$$[T(x^3)]_S = [3x^2]_S = \begin{pmatrix} 0 \\ 0 \\ 3 \\ 0 \end{pmatrix}$$

Hence

$$[T]_S = \begin{pmatrix} 0 & 1 & 0 & 0 \\ 0 & 0 & 2 & 0 \\ 0 & 0 & 0 & 3 \\ 0 & 0 & 0 & 0 \end{pmatrix}$$

(Parts (c) and (d) on the reverse side)

(c) What is the dimension of the null space of T ?

$$\text{RREF of } [T]_S \text{ is } \begin{pmatrix} 0 & 1 & 0 & 0 \\ 0 & 0 & 1 & 0 \\ 0 & 0 & 0 & 1 \\ 0 & 0 & 0 & 0 \end{pmatrix}$$

so nullspace is given (in S -coordinates) by $\text{span}\left(\begin{pmatrix} 1 \\ 0 \\ 0 \\ 0 \end{pmatrix}\right)$,
i.e. $\text{span}(1)$, all constant polynomials.

spanned by one nonzero vector

$$\Rightarrow \boxed{\dim \text{nullspace}(T) = 1}.$$

(d) What is the dimension of the range of T ?

sol'n 1 By rank-nullity,

$$\begin{aligned} \dim R(T) &= \dim P_3 - \dim \text{nullspace}(T) \\ &= 4 - 1 \\ &= \boxed{3} \end{aligned}$$

sol'n 2 using the RREF of T , we see that $T(x), T(x^2), T(x^3)$ are a basis of $R(T)$, so $R(T)$ is 3-dimensional.

6. [9 points] Suppose that A is a square matrix, and n is a positive integer such that $A^n = \mathbf{0}$ (the all-0's matrix).

(a) Prove that the only eigenvalue of A is $\lambda = 0$.

Suppose λ is an eigenvalue.

Then $\exists \vec{v} \neq \vec{0}$ st. $A\vec{v} = \lambda\vec{v}$.

It follows that:

$$A^n \vec{v} = \lambda^n \vec{v}$$

$$\Rightarrow \mathbf{0} \vec{v} = \lambda^n \vec{v}$$

$$\Rightarrow \vec{0} = \lambda^n \vec{v}$$

$$\Rightarrow \lambda^n = 0 \quad (\text{since } \vec{v} \neq \vec{0}).$$

$$\Rightarrow \underline{\lambda = 0}.$$

So $\lambda = 0$ is the only possible eigenvalue.

(b) Prove that if A is nonzero, then A is not diagonalizable.

\hookrightarrow Suppose A is diagonalizable and nonzero.

Or, more briefly: note that the entries of D must be eigenvalues of A , so by (a) they're all 0.

Then $A = P D P^{-1}$ where D is diagonal,
say $D = \begin{pmatrix} \lambda_1 & & 0 \\ & \ddots & \\ 0 & & \lambda_m \end{pmatrix}$. ($m = \#$ rows of A)

Then $A^n = P \begin{pmatrix} \lambda_1^n & & 0 \\ & \ddots & \\ 0 & & \lambda_m^n \end{pmatrix} P^{-1}$
 $\Rightarrow \mathbf{0} = P \begin{pmatrix} \lambda_1^n & & 0 \\ & \ddots & \\ 0 & & \lambda_m^n \end{pmatrix} P^{-1}$ (since $A^n = \mathbf{0}$)

$\Rightarrow P^{-1} \mathbf{0} P = \begin{pmatrix} \lambda_1^n & & 0 \\ & \ddots & \\ 0 & & \lambda_m^n \end{pmatrix}$
 $\Rightarrow \mathbf{0} = \begin{pmatrix} \lambda_1^n & & 0 \\ & \ddots & \\ 0 & & \lambda_m^n \end{pmatrix}$, so all $\lambda_1, \dots, \lambda_m$ are 0.
 $\Rightarrow D = \mathbf{0}$.

But this means that $A = P \cdot \mathbf{0} P^{-1} = \mathbf{0}$. Σ

So if $A \neq \mathbf{0}$, then it's not diagonalizable.

This page intentionally left blank. You may use it for scratchwork.

7. [12 points] Consider the matrix $A = \begin{pmatrix} 1 & -1 & -1 \\ 0 & 2 & -1 \\ 0 & 0 & 3 \end{pmatrix}$.

(a) What are the eigenvalues of A ?

$$|A - \lambda I| = \begin{vmatrix} 1-\lambda & -1 & -1 \\ 0 & 2-\lambda & -1 \\ 0 & 0 & 3-\lambda \end{vmatrix} = (1-\lambda)(2-\lambda)(3-\lambda)$$

$$\lambda = 1, 2, 3$$

(b) Find an eigenvector for each eigenvalue that you found in part (a).

$$\lambda = 1 \quad \begin{pmatrix} 0 & -1 & -1 \\ 0 & 1 & -1 \\ 0 & 0 & 2 \end{pmatrix} \xrightarrow{\text{row ops}} \begin{pmatrix} 0 & 1 & -1 \\ 0 & 0 & -2 \\ 0 & 0 & 2 \end{pmatrix} \xrightarrow{\text{free}} \begin{pmatrix} 0 & 1 & 0 \\ 0 & 0 & 1 \\ 0 & 0 & 0 \end{pmatrix} \quad \vec{v}_1 = \begin{pmatrix} 1 \\ 0 \\ 0 \end{pmatrix}$$

$$\lambda = 2 \quad \begin{pmatrix} -1 & -1 & -1 \\ 0 & 0 & -1 \\ 0 & 0 & 3 \end{pmatrix} \xrightarrow{\text{free}} \begin{pmatrix} 1 & 1 & 0 \\ 0 & 0 & 1 \\ 0 & 0 & 0 \end{pmatrix} \quad \vec{v}_2 = \begin{pmatrix} -1 \\ 1 \\ 0 \end{pmatrix}$$

$$\lambda = 3 \quad \begin{pmatrix} -2 & -1 & -1 \\ 0 & -1 & -1 \\ 0 & 0 & 0 \end{pmatrix} \xrightarrow{\text{free}} \begin{pmatrix} 1 & 0 & 0 \\ 0 & 1 & 1 \\ 0 & 0 & 0 \end{pmatrix} \quad \vec{v}_3 = \begin{pmatrix} 0 \\ -1 \\ 1 \end{pmatrix}$$

(Parts (c) and (d) on the reverse side)

(c) Find matrices P and D such that D is diagonal and

$$A = PDP^{-1}.$$

$$D = \text{diagonal w/ eigenvalues} = \underline{\underline{\begin{pmatrix} 1 & 0 & 0 \\ 0 & 2 & 0 \\ 0 & 0 & 3 \end{pmatrix}}}$$

$P =$ changed basis from $\{\vec{v}_1, \vec{v}_2, \vec{v}_3\}$
to std. basis

$$= \begin{pmatrix} \frac{1}{\sqrt{2}} & \frac{1}{\sqrt{2}} & \frac{1}{\sqrt{3}} \\ \frac{1}{\sqrt{2}} & \frac{1}{\sqrt{2}} & \frac{1}{\sqrt{3}} \\ \frac{1}{\sqrt{2}} & \frac{1}{\sqrt{2}} & \frac{1}{\sqrt{3}} \end{pmatrix}$$

$$= \underline{\underline{\begin{pmatrix} 1 & -1 & 0 \\ 0 & 1 & -1 \\ 0 & 0 & 0 \end{pmatrix}}}$$

(or any matrix where columns are multiples of these)

(d) Find an explicit formula for the matrix A^n .

(Your answer should be a 3×3 matrix, where each entry is written explicitly as a linear combination of n th powers of the eigenvalues of A).

we need P^{-1} :

$$\left(\begin{array}{ccc|ccc} 1 & -1 & 0 & 1 & 0 & 0 \\ 0 & 1 & -1 & 0 & 1 & 0 \\ 0 & 0 & 1 & 0 & 0 & 1 \end{array} \right) \rightarrow \left(\begin{array}{ccc|ccc} 1 & 0 & -1 & 1 & 1 & 0 \\ 0 & 1 & -1 & 0 & 1 & 0 \\ 0 & 0 & 1 & 0 & 0 & 1 \end{array} \right) \rightarrow \left(\begin{array}{ccc|ccc} 1 & 0 & 0 & 1 & 1 & 1 \\ 0 & 1 & 0 & 0 & 1 & 1 \\ 0 & 0 & 1 & 0 & 0 & 1 \end{array} \right)$$

$$\text{so } P^{-1} = \begin{pmatrix} 1 & 1 & 1 \\ 0 & 1 & 1 \\ 0 & 0 & 1 \end{pmatrix}.$$

$$\text{so } A^n = P D^n P^{-1} = \begin{pmatrix} 1 & -1 & 0 \\ 0 & 1 & -1 \\ 0 & 0 & 1 \end{pmatrix} \begin{pmatrix} 1 & 0 & 0 \\ 0 & 2^n & 0 \\ 0 & 0 & 3^n \end{pmatrix} \begin{pmatrix} 1 & 1 & 1 \\ 0 & 1 & 1 \\ 0 & 0 & 1 \end{pmatrix}$$

$$= \begin{pmatrix} 1 & -1 & 0 \\ 0 & 1 & -1 \\ 0 & 0 & 1 \end{pmatrix} \begin{pmatrix} 1 & 1 & 1 \\ 0 & 2^n & 2^n \\ 0 & 0 & 3^n \end{pmatrix}$$

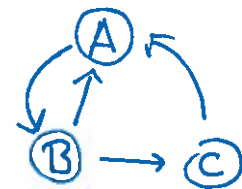
$$= \boxed{\begin{pmatrix} 1 & 1-2^n & 1-2^n \\ 0 & 2^n & 2^n-3^n \\ 0 & 0 & 3^n \end{pmatrix}}$$

8. [9 points] Your search engine is attempting to rank three webpages, denoted A , B , and C . You produce a sequence of scores for these pages, as follows. Each page is assigned an initial number of points in some manner. Then the scores are revised in a sequence of stages. In each stage, the following three things happen simultaneously:

- All of page A 's points from the previous stage are given to page B .
- Page B 's points from the previous stage are split evenly between pages A and C .
- All of page C 's points from the previous stage are given to page A .

(a) Describe briefly how your search engine might have decided on these rules, based on the hyperlinks between pages A , B , and C (following the "original version" of Pagerank that we discussed in class).

A links only to B
 B links to both A & C
 C links only to A



(b) Suppose that in stage 1, the scores are as follows: A has 2 points, B has 4 points, and C has 1 point. What will the scores be in stage 3?

stage	1	2	3
A's score	2	3	3
B's score	4	2	3
C's score	1	2	1

A has 3
 B has 3
 C has 1

(Parts (c) and (d) on the reverse side)

- (c) Write a transition matrix to describe how the scores are updated from one round to the next. More precisely: find a matrix T such that if \vec{u} is a vector consisting of the scores of A, B and C at some stage, then $T\vec{u}$ is a vector consisting of the scores of A, B , and C in the following stage. (This was the "link matrix" in our discussion of Pagerank.)

$$T = \begin{pmatrix} 0 & 1/2 & 1 \\ 1 & 0 & 0 \\ 0 & 1/2 & 0 \end{pmatrix}$$

- (d) Find an assignment of positive scores to A, B , and C such that, if these are taken to be the initial scores, then the scores of the three pages will not change from one stage to the next.

We want $T\vec{v} = \vec{v}$ (eigenvector w/ $\lambda=1$).

$$\text{nullspace}(T-I) = \text{nullspace} \begin{pmatrix} -1 & 1/2 & 1 \\ 1 & -1 & 0 \\ 0 & 1/2 & -1 \end{pmatrix}$$

$$\text{row-reducing } T-I: \rightarrow \begin{pmatrix} 1 & -1/2 & -1 \\ 0 & -1/2 & 1 \\ 0 & 1/2 & -1 \end{pmatrix} \rightarrow \begin{pmatrix} 1 & -1/2 & -1 \\ 0 & 1 & -2 \\ 0 & 0 & 0 \end{pmatrix}$$

$$\rightarrow \begin{pmatrix} 1 & 0 & -2 \\ 0 & 1 & -2 \\ 0 & 0 & 0 \end{pmatrix}$$

↖ free variable

$$\Rightarrow \boxed{\vec{v} = \begin{pmatrix} 2 \\ 2 \\ 1 \end{pmatrix}}$$

is one steady-state sol'n. (any positive multiple is ok).
 (the steady-state probability vector
 is $\begin{pmatrix} 2/5 \\ 2/5 \\ 1/5 \end{pmatrix}$).

9. [9 points] Suppose that V is an inner product space, where the inner product of \vec{v} and \vec{w} is denoted $\langle \vec{v}, \vec{w} \rangle$. As usual, define $\|\vec{u}\| = \sqrt{\langle \vec{u}, \vec{u} \rangle}$. Prove that for any two vectors $\vec{v}, \vec{w} \in V$,

$$\|\vec{v} + \vec{w}\|^2 + \|\vec{v} - \vec{w}\|^2 = 2\|\vec{v}\|^2 + 2\|\vec{w}\|^2.$$

$$\underline{\|\vec{v} + \vec{w}\|^2 + \|\vec{v} - \vec{w}\|^2} = \langle \vec{v} + \vec{w}, \vec{v} + \vec{w} \rangle + \langle \vec{v} - \vec{w}, \vec{v} - \vec{w} \rangle$$

using linearity
in both
arguments

$$\begin{aligned} &= \langle \vec{v}, \vec{v} + \vec{w} \rangle + \langle \vec{w}, \vec{v} + \vec{w} \rangle + \langle \vec{v}, \vec{v} - \vec{w} \rangle - \langle \vec{w}, \vec{v} - \vec{w} \rangle \\ &= \langle \vec{v}, \vec{v} \rangle + \langle \vec{v}, \vec{w} \rangle + \langle \vec{w}, \vec{v} \rangle + \langle \vec{w}, \vec{w} \rangle \\ &\quad + \langle \vec{v}, \vec{v} \rangle - \langle \vec{v}, \vec{w} \rangle - \langle \vec{w}, \vec{v} \rangle + \langle \vec{w}, \vec{w} \rangle \end{aligned}$$

cancelling
terms

$$= 2 \cdot \langle \vec{v}, \vec{v} \rangle + 2 \langle \vec{w}, \vec{w} \rangle$$

$$= \underline{2 \cdot \|\vec{v}\|^2 + 2 \cdot \|\vec{w}\|^2}, \text{ as desired.}$$

This page intentionally left blank. You may use it for scratchwork.

10. [9 points] Suppose that $f(x)$ is a continuous function on the interval $[-\pi, \pi]$ that has been measured in a laboratory. You have reason to believe that the function should be approximately equal to some linear combination of $\sin(x)$ and $\cos(x)$. Using your experimental data, you compute the following integrals.

$$\int_{-\pi}^{\pi} f(x) \sin x \, dx = 7$$

$$\int_{-\pi}^{\pi} f(x) \cos x \, dx = 13$$

You may also use, without proof, the values of the following integrals.

$$\int_{-\pi}^{\pi} \sin^2 x \, dx = \pi$$

$$\int_{-\pi}^{\pi} \sin x \cos x \, dx = 0$$

$$\int_{-\pi}^{\pi} \cos^2 x \, dx = \pi$$

- (a) Let $V = \mathcal{C}^{(0)}[-\pi, \pi]$ denote the vector space of continuous functions on $[-\pi, \pi]$. Define an inner product on V , and identify each of the five integrals above as an inner product $\langle f, g \rangle$ of two elements f, g of V .

$$\langle f, g \rangle := \int_{-\pi}^{\pi} f(x)g(x) \, dx$$

Then these five integrals are, respectively,

$$\langle f, \sin x \rangle = 7$$

$$\langle f, \cos x \rangle = 13$$

$$\langle \sin x, \sin x \rangle = \pi$$

$$\langle \sin x, \cos x \rangle = 0$$

$$\langle \cos x, \cos x \rangle = \pi$$

ie.

$\sin x$ & $\cos x$
are orthogonal.

(b) Suppose that we choose two constants c_1, c_2 and define a function $g(x)$ as follows:

$$g(x) = c_1 \sin x + c_2 \cos x.$$

Find the values of c_1, c_2 that will ensure that $\int_{-\pi}^{\pi} (f(x) - g(x))^2 dx$ is as small as possible.

To minimize $\langle f-g, f-g \rangle \quad (= \int_{-\pi}^{\pi} (f(x) - g(x))^2 dx)$

it suffices to ensure that

$$\begin{aligned} \langle f-g, \sin x \rangle &= 0 \\ \& \langle f-g, \cos x \rangle &= 0 \end{aligned} \quad \left. \vphantom{\begin{aligned} \langle f-g, \sin x \rangle &= 0 \\ \& \langle f-g, \cos x \rangle &= 0 \end{aligned}} \right\} \begin{array}{l} \text{proved on} \\ \text{homework.} \\ \text{(Pset 11, supp 2(b))} \end{array}$$

ie.

$$\begin{aligned} \langle f - c_1 \sin x - c_2 \cos x, \sin x \rangle &= 0 \\ \& \langle f - c_1 \sin x - c_2 \cos x, \cos x \rangle &= 0. \end{aligned}$$

Then give: (by linearity)

$$\begin{array}{l} 0 = \langle f, \sin x \rangle - c_1 \langle \sin x, \sin x \rangle - c_2 \langle \cos x, \sin x \rangle \\ 0 = 7 - c_1 \cdot \pi - c_2 \cdot 0 \\ \Rightarrow \underline{c_1 = 7/\pi} \end{array} \quad \left| \quad \begin{array}{l} 0 = \langle f, \cos x \rangle - c_1 \langle \sin x, \cos x \rangle \\ \quad \quad \quad - c_2 \langle \cos x, \cos x \rangle \\ 0 = 13 - c_1 \cdot 0 - c_2 \cdot \pi \\ \Rightarrow \underline{c_2 = 13/\pi} \end{array} \right.$$

(can also use the "projection formula" from class).

so
$$g(x) = \frac{7}{\pi} \sin x + \frac{13}{\pi} \cos x$$

is the best approximation (as measured by $\int_{-\pi}^{\pi} (f(x) - g(x))^2 dx$)